


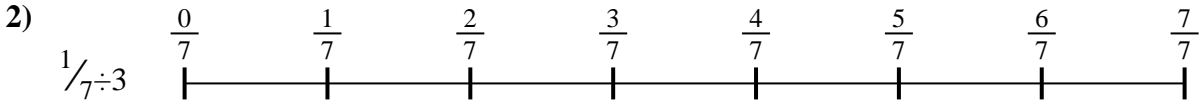


Use the numberline to solve each problem. The first is marked for you.


**Answers**




1. \_\_\_\_\_




2. \_\_\_\_\_



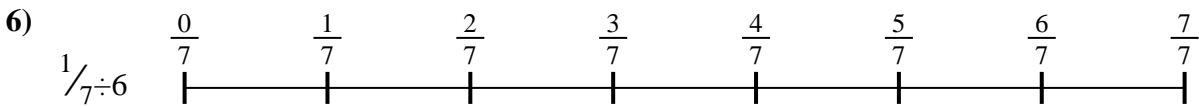
3. \_\_\_\_\_




4. \_\_\_\_\_



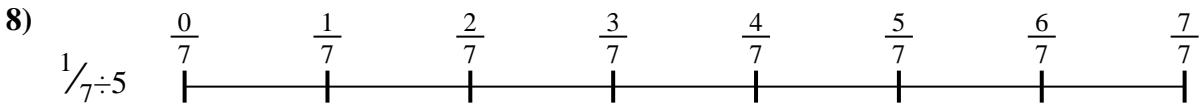
5. \_\_\_\_\_



6. \_\_\_\_\_



7. \_\_\_\_\_



8. \_\_\_\_\_

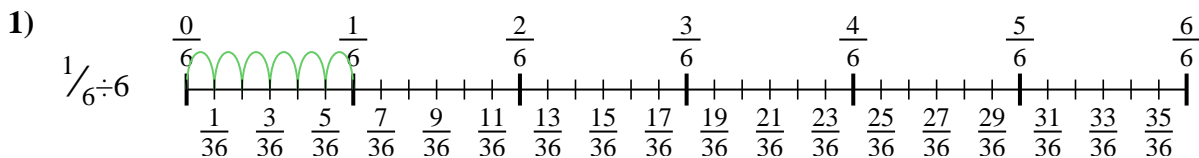


9. \_\_\_\_\_

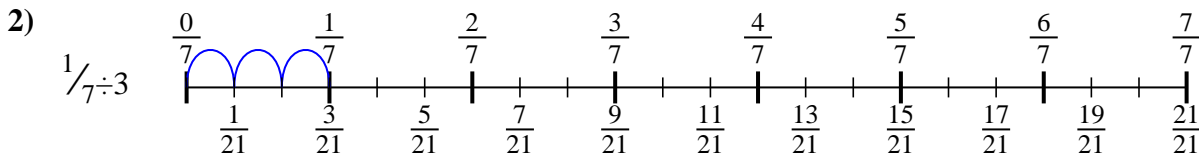


Use the numberline to solve each problem. The first is marked for you.

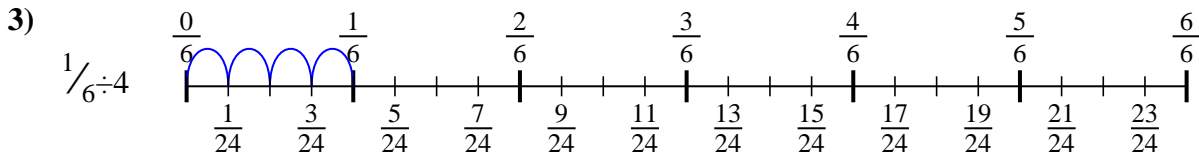
**Answers**



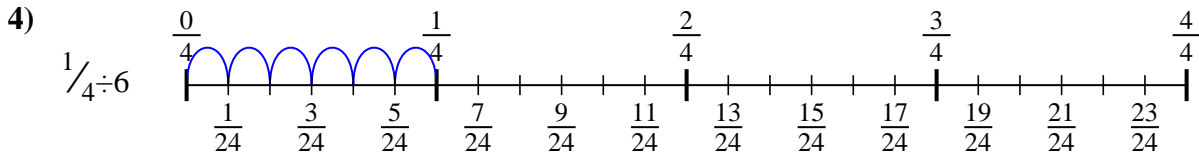
1.  $\frac{1}{36}$



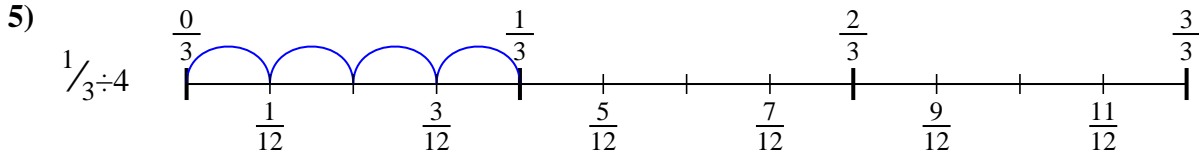
2.  $\frac{1}{21}$



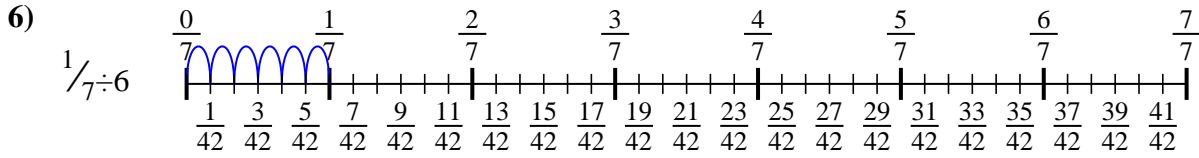
3.  $\frac{1}{24}$



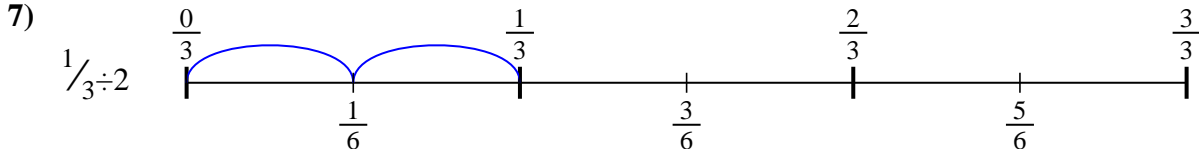
4.  $\frac{1}{24}$



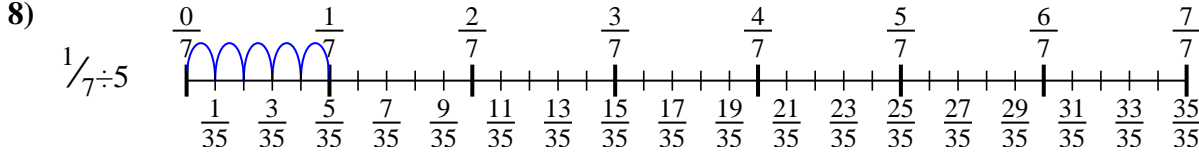
5.  $\frac{1}{12}$



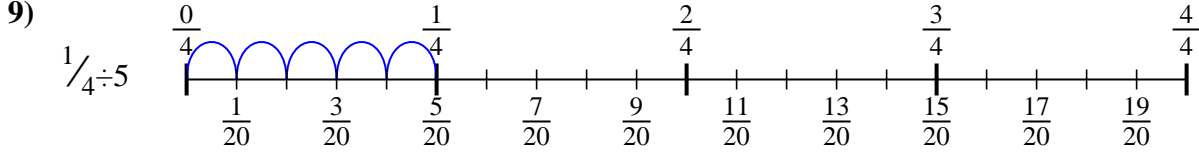
6.  $\frac{1}{42}$



7.  $\frac{1}{6}$



8.  $\frac{1}{35}$



9.  $\frac{1}{20}$



Use the numberline to solve each problem. The first is marked for you.

**Answers**

$1/35$

$1/6$

$1/24$

$1/21$

$1/24$

$1/36$

$1/42$

$1/20$

$1/12$

1. \_\_\_\_\_

2. \_\_\_\_\_

3. \_\_\_\_\_

4. \_\_\_\_\_

5. \_\_\_\_\_

6. \_\_\_\_\_

7. \_\_\_\_\_

8. \_\_\_\_\_

9. \_\_\_\_\_

1)

2)

3)

4)

5)

6)

7)

8)

9)